

Name:

Date:

## First Class End of Year Maths Assessment

Answer as many questions as you can below to show all the hard work you did in First Class this year!

### 1. Counting



How many sweets?

\_\_\_\_\_

### 2. Cross out all of the even numbers.

1      5      7      2      3      9      8      4      6      10

3.  $6 + 3 =$  \_\_\_\_\_

4.  $2 + 0 =$  \_\_\_\_\_


5.  $8 +$  \_\_\_\_\_  $= 17$

6. Lucy has 4 markers in her pencil case. Katie has 10 markers in her pencil case.  
How many more markers does Katie have?

\_\_\_\_\_

total for  
this page

7.

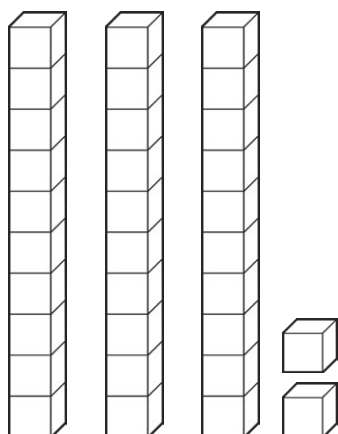


There are \_\_\_\_\_ less dogs than cats.


8. a)  $45 =$  \_\_\_\_\_ Tens + \_\_\_\_\_ Ones (units)

b)  $32 =$  \_\_\_\_\_ Tens + \_\_\_\_\_ Ones (units)

9. How many cubes?



a) \_\_\_\_\_



b) \_\_\_\_\_

10.  $15 - 6 =$  \_\_\_\_\_

11.  $25 -$  \_\_\_\_\_  $= 20$

12. There are 20 children in Ms Smith's class. Today, there are 7 children absent.  
How many children are at school today?

\_\_\_\_\_ - \_\_\_\_\_ = \_\_\_\_\_

total for  
this page

13. Add these numbers.

$$\begin{array}{r} \text{T} \quad \text{U} \\ 1 \quad 6 \\ + \quad \quad 3 \\ \hline \end{array}$$

$$\begin{array}{r} \text{T} \quad \text{U} \\ 4 \quad 3 \\ + \quad 2 \quad 5 \\ \hline \end{array}$$

$$\begin{array}{r} \text{T} \quad \text{U} \\ 6 \quad 7 \\ + \quad 2 \quad 8 \\ \hline \end{array}$$

14. Subtract these numbers.

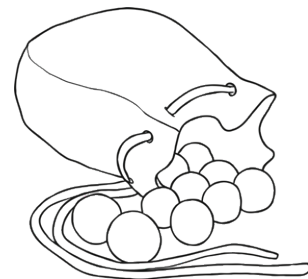
$$\begin{array}{r} \text{T} \quad \text{U} \\ 3 \quad 4 \\ - \quad 2 \quad 1 \\ \hline \end{array}$$

$$\begin{array}{r} \text{T} \quad \text{U} \\ 7 \quad 8 \\ - \quad 5 \quad 7 \\ \hline \end{array}$$

$$\begin{array}{r} \text{T} \quad \text{U} \\ 8 \quad 7 \\ - \quad 8 \quad 4 \\ \hline \end{array}$$

15. Rosie had 36 marbles. She gave 18 to her brother. How many did she have left?

\_\_\_\_\_ - \_\_\_\_\_ = \_\_\_\_\_



16. a) There are \_\_\_\_\_ days in a week.

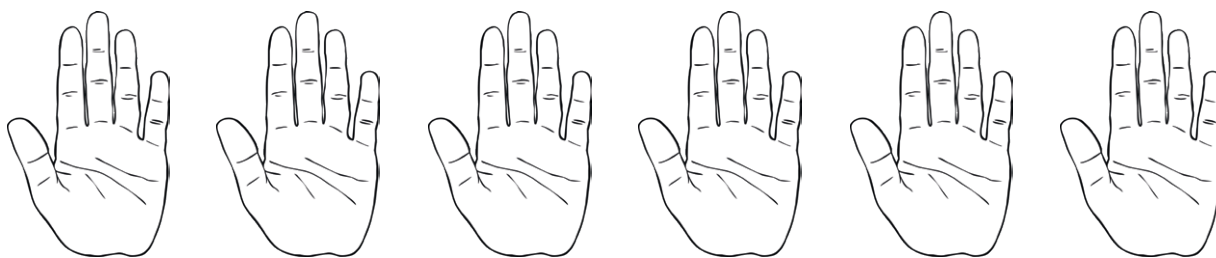
b) There are \_\_\_\_\_ months in a year.

17.

| June |     |      |     |     |     |     |
|------|-----|------|-----|-----|-----|-----|
| Sun  | Mon | Tues | Wed | Thu | Fri | Sat |
|      |     |      |     |     | 1   | 2   |
| 3    | 4   | 5    | 6   | 7   | 8   | 9   |
| 10   | 11  | 12   | 13  | 14  | 15  | 16  |
| 17   | 18  | 19   | 20  | 21  | 22  | 23  |
| 24   | 25  | 26   | 27  | 28  | 29  | 30  |

- a) What season is June in? \_\_\_\_\_
- b) How many days are there in June? \_\_\_\_\_
- c) What day is the 20th of June? \_\_\_\_\_
- d) What date is the last Monday in June? \_\_\_\_\_

18. a) How many fingers? \_\_\_\_\_



b) How many shoes? \_\_\_\_\_

total for  
this page

19. Complete the table below.


| Shape      | My Drawing | Number of Sides | Number of Corners |
|------------|------------|-----------------|-------------------|
| Square     |            |                 |                   |
| Rectangle  |            |                 |                   |
| Semicircle |            |                 |                   |
| Circle     |            |                 |                   |
| Triangle   |            |                 |                   |

20. Follow the instructions in the table and colour the row of houses.

|                               |                                 |
|-------------------------------|---------------------------------|
| 1 <sup>st</sup> house = Green | 10 <sup>th</sup> house = Orange |
| 5 <sup>th</sup> house = Blue  | 6 <sup>th</sup> house = Pink    |
| 8 <sup>th</sup> house = Black | 3 <sup>rd</sup> house = Red     |
| 4 <sup>th</sup> house = White | 9 <sup>th</sup> house = Grey    |
| 7 <sup>th</sup> house = Brown | 2 <sup>nd</sup> house = Purple  |



21. The chart shows the number of children in 1st Class who have pets.



- a) How many children have a dog? \_\_\_\_\_
- b) Which pet is most popular? \_\_\_\_\_
- c) How many more goldfish are there than cats? \_\_\_\_\_
- b) \_\_\_\_\_ children own a hamster.

22. Count the coins.



total for  
this page

23.



25c



20c



30c



15c



40c

a) How much is a bun and a cola drink? \_\_\_\_\_


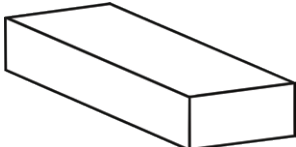
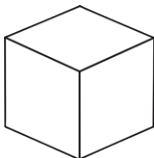
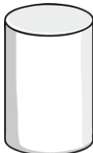
b) How much is a doughnut and ice-cream? \_\_\_\_\_

24. a) How many buns can I buy with 50c? \_\_\_\_\_

b) How much change would I have? \_\_\_\_\_

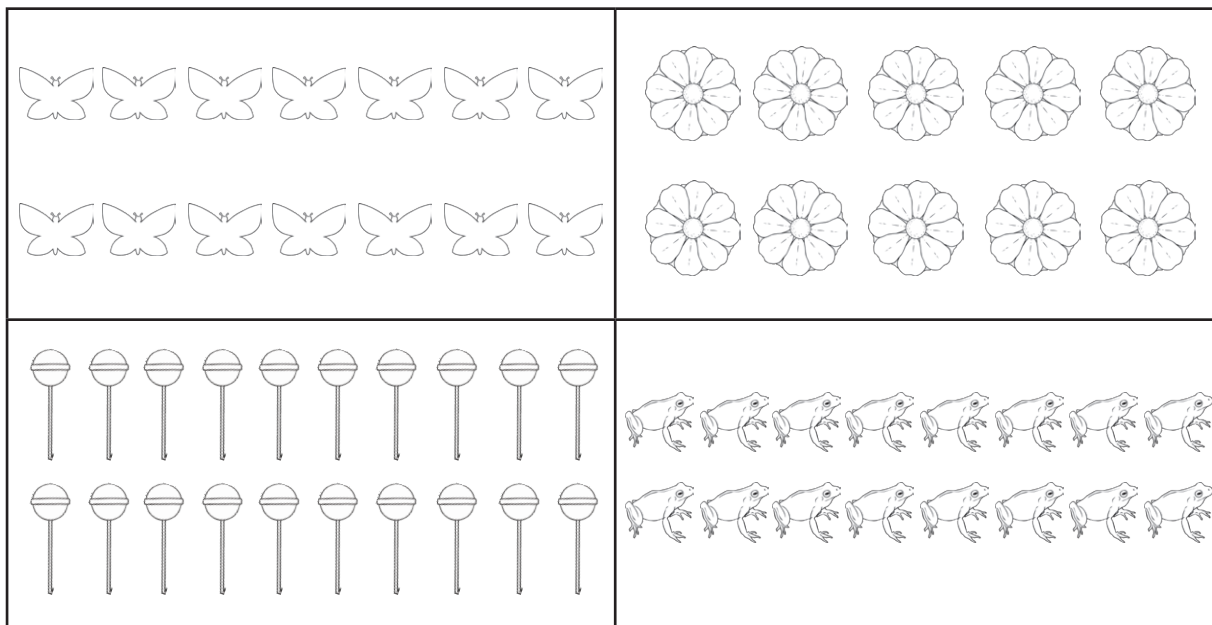
25. Can I buy crisps and a bun if I have 50c? \_\_\_\_\_

26. Use a line to match each shape to the correct facts.

| Shape   |  | Faces | Corners | Edges |
|---|--|-------|---------|-------|
|  |  | 6     | 0       | 2     |
|  |  | 3     | 8       | 0     |
|  |  | 1     | 0       | 12    |
|  |  | 6     | 8       | 12    |

total for  
this page

**27. Colour half of each amount.**

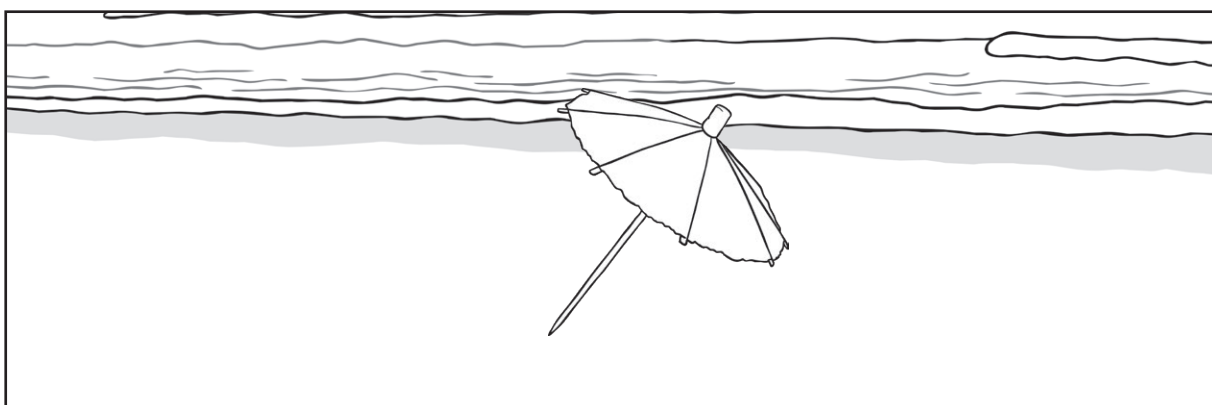


**28. Draw an 'A' on the tallest building. Draw a 'B' on the smallest building.**



**29. Draw:**

- a sandcastle on the right hand side of the umbrella;
- a bucket on the left side of the umbrella;
- a bird on top of the umbrella;
- a spade between the bucket and the umbrella.



**30.** Draw and label something that completes the table.

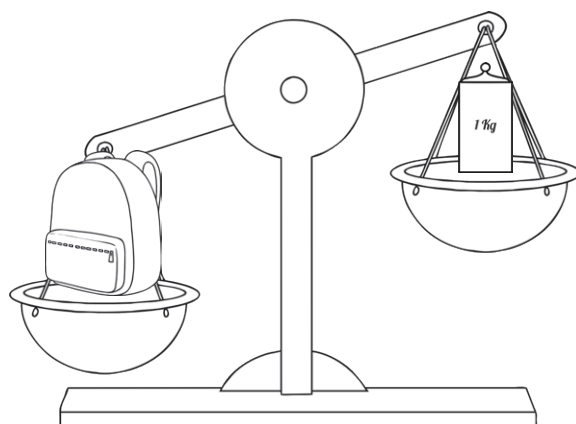
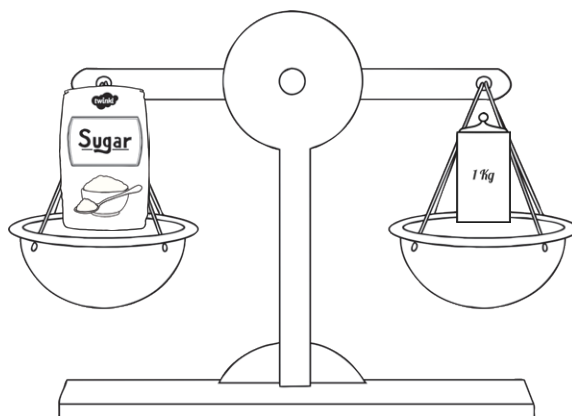
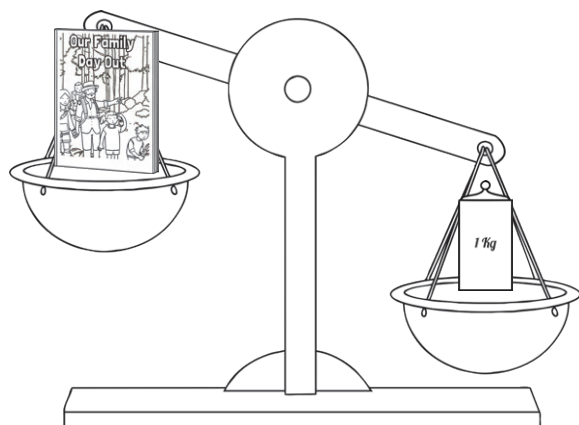
| Less Than One Litre | More Than One Litre |
|---------------------|---------------------|
|                     |                     |
| Name:               | Name:               |

**31.** Draw and label something that completes the table.

| Less Than One Litre | More Than One Litre |
|---------------------|---------------------|
|                     |                     |
| Name:               | Name:               |

total for  
this page

32. Look at the scales below.



- How much does the bag of sugar weigh? \_\_\_\_\_
- Which is lighter, the book or the sugar? \_\_\_\_\_
- Which is heavier, the schoolbag or the sugar? \_\_\_\_\_











33. The teacher is booking a bus for the school tour. There are 45 students going on the tour. Each bus can take 10 students. How many buses will they need?


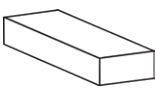
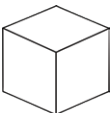

\_\_\_\_\_

\*\*END OF TEST\*\*

total for  
this page

| Questions | Answers                                    |
|-----------|--|
| 1         | 11   |
| 2         | 2, 8, 6, 10 crossed out                    |
| 3         | 9  |
| 4         | 2  |
| 5         | 9  |
| 6         | 6  |
| 7         | 4  |
| 8         | (a) 4 Tens + 5 Ones<br>(b) 3 Tens + 2 Ones |
| 9         | (a) 32<br>(b) 45<br>(c) 98                 |
| 10        | 9  |
| 11        | 5  |
| 12        | 13   |
| 13        | (a) 19<br>(b) 68<br>(c) 95                 |
| 14        | (a) 13<br>(b) 21<br>(c) 3 or 03            |
| 15        | 18   |
| 16        | (a) 7<br>(b) 12                            |

| Questions | Answers   |
|-----------|---|
| 17        | (a) summer<br>(b) 30<br>(c) Wednesday<br>(d) 25 <sup>th</sup>   |
| 18        | (a) 30 30<br>(b) 16   |
| 19        | Square: 4 sides, 4 corners<br>Rectangle: 4 sides, 4 corners<br>Semi-circle: 2 sides 2 corners<br>Circle: 1 side, 0 corners<br>Triangle: 3 sides, 3 corners  |
| 20        |  1. green  2. purple  3. red<br> 4. white  5. blue  6. pink<br> 7. brown  8. black  9. grey<br> 10. orange |
| 21        | (a) 8<br>(b) Goldfish<br>(c) 7<br>(d) 5   |
| 22        | (a) 46c<br>(b) 37c  |
| 23        | (a) 50c<br>(b) 40c  |
| 24        | (a) 2<br>(b) 10c  |
| 25        | No  |

| Questions | Answers   |   |   |   |
|-----------|---|---|---|---|
| 26        |   |   |   |   |
|           |  |  |  |  |
| Shape     | Faces   | Corners   | Edges   |   |
|           | 1   | 0   | 0   |   |
|           | 6   | 8   | 12  |   |
|           | 6   | 8   | 12  |   |
|           | 3   | 0   | 2   |   |

|    |  |
|----|--|
| 27 | The child has coloured: 7 butterflies, 5 flowers, 10 lollipops, 8 frogs.                 |
| 28 | Tallest building marked with (a)<br>smallest building marked with (b)                    |
| 29 | Child’s illustration reflects instructions   |
| 30 | Child appropriately illustrates items that hold less than a litre and more than a litre. |
| 31 | Child appropriately illustrates items that would be lighter and heavier than themselves. |
| 32 | (a) 1kg<br>(b) books<br>(c) schoolbag  |
| 33 | 5 buses  |